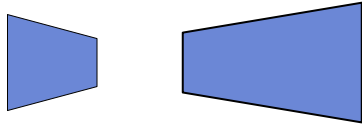




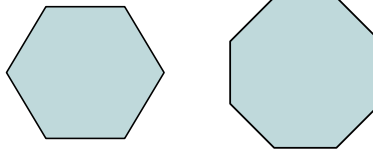
Determine if the shapes shown are 'similar', 'congruent' or 'neither'.

Answers

1)



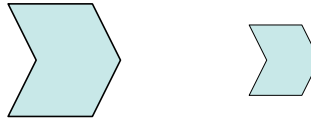
2)



3)



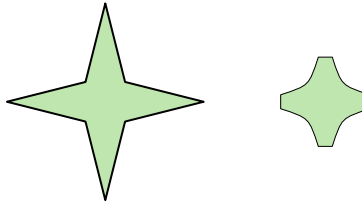
4)




5)



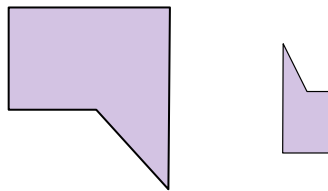
6)



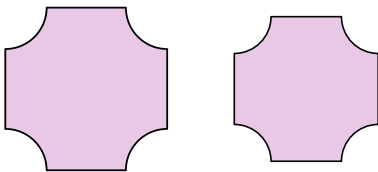
7)



8)



9)



10)



11)



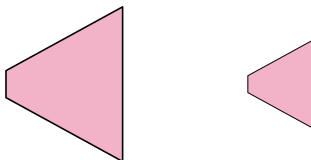
12)



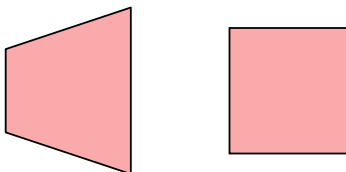
13)




14)



15)



16)



1. _____

2. _____

3. _____

4. _____

5. _____

6. _____

7. _____

8. _____

9. _____

10. _____

11. _____

12. _____

13. _____

14. _____

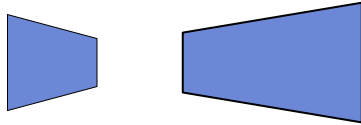
15. _____

16. _____

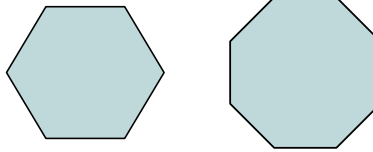


Determine if the shapes shown are 'similar', 'congruent' or 'neither'.

1)



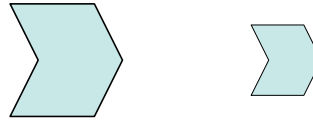
2)



3)



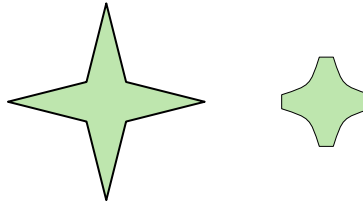
4)




5)



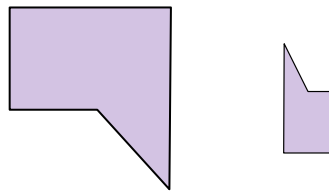
6)



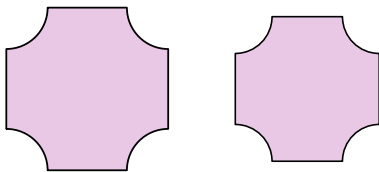
7)



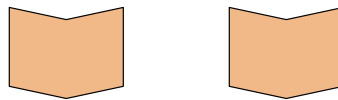
8)



9)



10)



11)



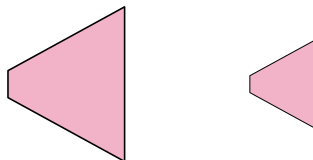
12)



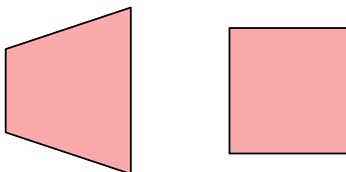
13)




14)



15)



16)



Answers

1. neither

2. neither

3. congruent

4. similar

5. similar

6. neither

7. similar

8. neither

9. similar

10. congruent

11. congruent

12. congruent

13. similar

14. similar

15. neither

16. neither